

April 13th weekly packet

Subject	Instructions
Reading	<p>Get Epic Weekly reading comprehension:</p> <ul style="list-style-type: none"> • Grandpa Comes to First Grade • Sea Otters-Life Under the Sea <p>Instructions to access Epic: Look for an email from Getepic.com. Follow the instructions to sign up FOR FREE. After signing up you will get direct access to our virtual classroom. You can find the books above under the "assignments" tab. Make sure to press the green "finish book" button when the story is completed. Read the story AT LEAST two times before taking the quiz. You can start the quiz by pressing the blue "start the quiz" button located under the green "finish book" button.</p> <p>Reading weekly practice 116-117</p>
Math	<p>Math lessons should be completed in this order:</p> <p>6-3 quick check 6-3 reteaching 6-3 practice</p> <p>*1 will use only the practice page for a grade.</p>
Science/ Social studies	<p>Science lessons should be completed in this order:</p> <p>-Science weekly "Water" weekly read -science weekly literacy connection -science weekly saltwater vs freshwater</p>
I-ready	<p>Weekly total: 120 minutes</p> <p>-60 min math -60 min reading</p> <p>Weekend minutes are included</p>

Name _____

Number Words

Some adjectives are words for numbers.

one	two	three	four	five
1	2	3	4	5
six	seven	eight	nine	ten
6	7	8	9	10

Circle the number word in each sentence. Draw a line to the picture it tells about.


1. The baby's bike has three wheels.




2. Pam's new bike has two wheels.



3. She rides a bike with one wheel.



4. There are four wheels on that bike.



5. See six wheels go round and round.



© Macmillan/McGraw-Hill



Name _____

Number Words

Some adjectives are words for numbers.

Example: There are **seven** children on the track.

Complete the sentence. Write the number word that stands for the number in ().



1. The track is _____ mile long. (1)


2. There are _____ kids on my team. (8)

3. I couldn't run fast when I was _____. (4)

4. Now I am _____ and run very fast. (7)

5. I beat _____ runners in a race. (5)

6. My team has won _____ races. (10)



Name _____


Quick Check

6-3

1. Which is the whole?

$6 + 8 =$ _____

- (A) 6
- (B) 8
- (C) 10
- (D) 14



2. Kyle wrote the addition sentence $7 + 4 = 11$ for the picture.




Which subtraction sentence is related?

- (A) $11 - 6 = 5$
- (B) $11 - 7 = 4$
- (C) $7 - 4 = 3$
- (D) $4 - 4 = 0$

3. Complete the picture to solve.
Write the number sentences.

Michael sees 17 caterpillars.
Some are brown.
The rest are green.

_____ + _____ = _____
_____ - _____ = _____



Name _____

Reteaching

6-3

Using Related Facts

These two facts are related.




The addition sentence and the subtraction sentence have the same 3 numbers.

$$9 + 3 = 12$$

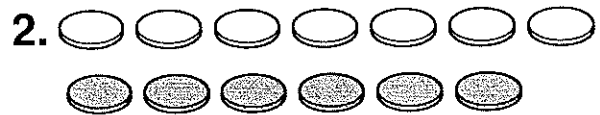
$$12 - 3 = 9$$

The sum of the addition sentence is the first number in the subtraction sentence.


Add. Then write a related subtraction fact.




$$8 + 4 = \underline{12}$$
$$\underline{12} - \underline{4} = \underline{8}$$



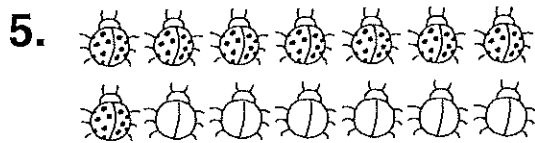
$$7 + 6 = \underline{13}$$
$$\underline{13} - \underline{6} = \underline{\quad}$$



$$9 + 2 = \underline{\quad}$$
$$\underline{\quad} - 9 = \underline{\quad}$$



$$8 + 5 = \underline{\quad}$$
$$\underline{\quad} - 8 = \underline{\quad}$$



$$8 + 6 = \underline{\quad}$$
$$\underline{\quad} - 8 = \underline{\quad}$$



$$8 + 7 = \underline{\quad}$$
$$\underline{\quad} - 8 = \underline{\quad}$$

Name _____

Practice

6-3

Using Related Facts

Write an addition fact and a related subtraction fact.

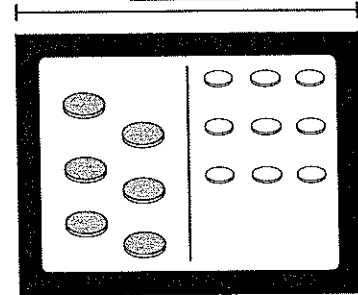
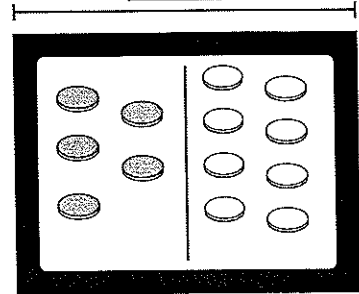
1. $\underline{5} + \underline{8} = \underline{13}$

$\underline{13} - \underline{8} = \underline{5}$

2. $\underline{\quad} + \underline{\quad} = \underline{\quad}$

$\underline{\quad} - \underline{\quad} = \underline{\quad}$

13




Reasoning

Solve the problem.

3. Abby's dad wrote this addition sentence on a piece of paper.

Which subtraction sentence is related?

- (A) $7 + 5 = 12$
- (B) $12 - 7 = 5$
- (C) $12 - 9 = 3$
- (D) $7 - 5 = 2$




EARTH SPACE SCIENCE WEEKS

Science Studies Weekly™





Adventure

GRADE 1



Water

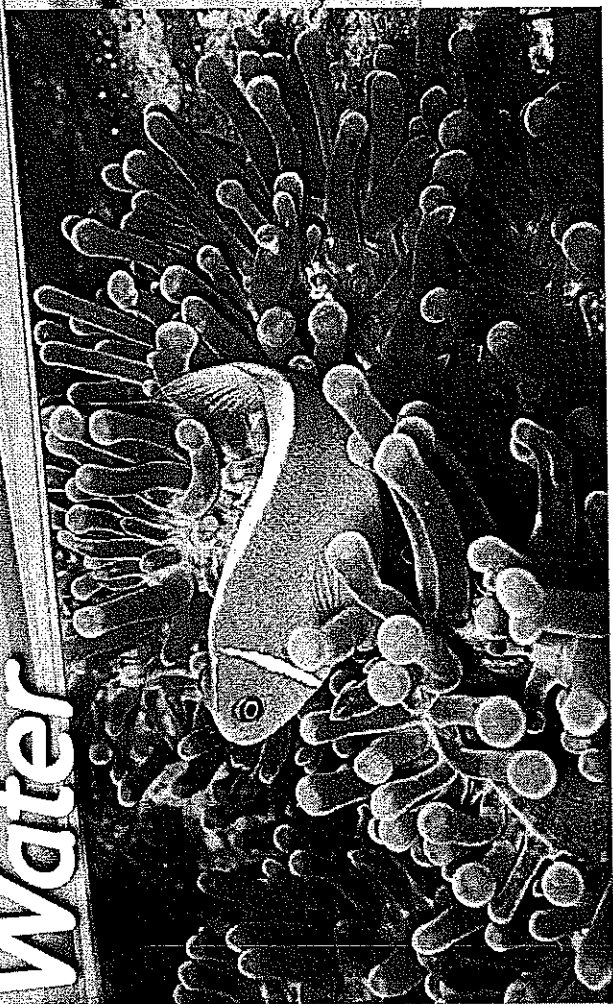
See Primary-Source Related Media...

www.s-w.co/S1-5

The water in the ocean is saltwater. The water in rivers, lakes and ponds is freshwater.

Water



Only a few plants live in the ocean. The water is too salty for most plants. Many animals live in the ocean.

Jellyfish float in the ocean. Dolphins and whales swim in the ocean. Crabs and starfish live on the bottom of the ocean.

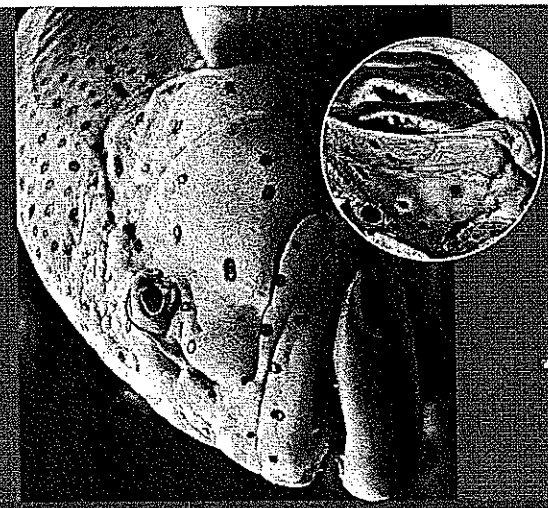


Most freshwater plants grow near the edge of the water. Frogs and water spiders are freshwater animals.

Some fish and turtles live in saltwater. Some fish and turtles live in freshwater.



Look & Learn



Look at the pictures. What animal do you see? Circle your answer.

frog fish

The picture in the circle shows the gills. Gills let animals breathe under the water.

Water Evaporates

When water gets warm, it evaporates. That means the water escapes into the air. This will show you how it works.

What You Need

- a glass
- water
- a sunny day
- a teaspoon
- 2 saucers that are the same size



What to Do

1. Put the saucers next to each other in a sunny window.
2. Put a teaspoon of water on each saucer.
3. Turn the glass upside down. Cover the water on one of the saucers with the glass.
4. Wait 30 minutes.
5. Look at the saucers. Is there water on the saucer without the glass?

Circle your answer. yes no

Is there water under the glass on the other saucer?

Circle your answer. yes no

Draw a picture of your favorite animal that lives in water.



Name: _____ Date: _____

Science 1st Grade Studies Weekly

Week 5, Earth-Space Science





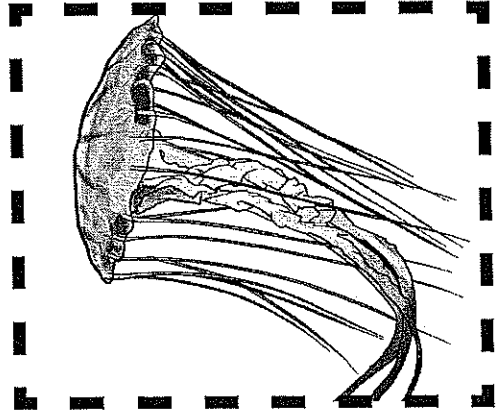

Saltwater vs. Freshwater

Water in the ocean is called saltwater. Water in rivers, lakes and ponds is called freshwater. Look at the pictures. Are the animals found in salt or freshwater? Cut and glue the pictures in the correct box.

Saltwater

Freshwater

--	--



Name: _____ Date: _____

Science 1st Grade Studies Weekly

Week 5, Earth-Space Science

Weekly Literacy Connection

Circle and write the best word on the line.

1. The water in the _____ is saltwater.
(ocean, lake, pool)

2. Crabs and starfish live on the _____
of the ocean. **(rock, top, bottom)**

3. Freshwater is in rivers, lakes
and _____.
(oceans, ponds, boxes)

4. Some fish and turtles _____
in salt and freshwater. **(live, sing, pick)**

5. Frogs and water spiders are _____
water animals. **(salt, fresh, cold)**