


Name: _____

Picture Dictionary

Draw a picture of 11 of your words. Write the word.



EXAMPLE. laughed

1. _____

2. _____

3. _____

4. _____

5. _____

Name: _____

6. _____

7. _____

8. _____

9. _____

10. _____

11. _____

Name: _____

E E X A A E T P P L A T E J U
 P L U M L L W L P L E A S E N
 A L Y S A S P A P L E E P A L
 P P L L T U E T A S P E A P T
 T U Y P L E L E T P T N P L I
 T A A P L A T S E L E P L P A
 T Y E H O P L A Y S O P A E P
 C T E P L U S P L A T E N U L
 A P V L L A D G H E X L E P O
 P S A T A P T A U E P E T S T

"PL" Words

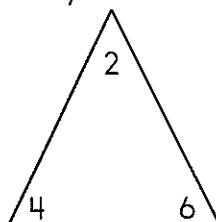
PL _____ PL _____
 PL _____ PL _____
 PL _____ PL _____
 PL _____ PL _____
 PL _____

I found _____ "PL" words.

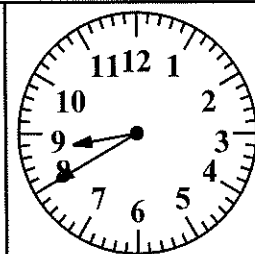
One hundred fifty people came to the park. They came for the Dance Like a Chicken Day party. Of that group, 92 danced like a chicken. How many did not dance?

- buhloon
- baloon
- balloon
- ballon

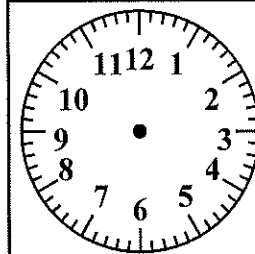
Fill in the blanks using numbers from the fact family.



+ =
 + =
 - =
 - =



_____ : _____



9 : 20

$$\begin{array}{r} 91 \\ + 76 \\ \hline \end{array}$$

$$\begin{array}{r} 79 \\ - 30 \\ \hline \end{array}$$

one hundred thirty

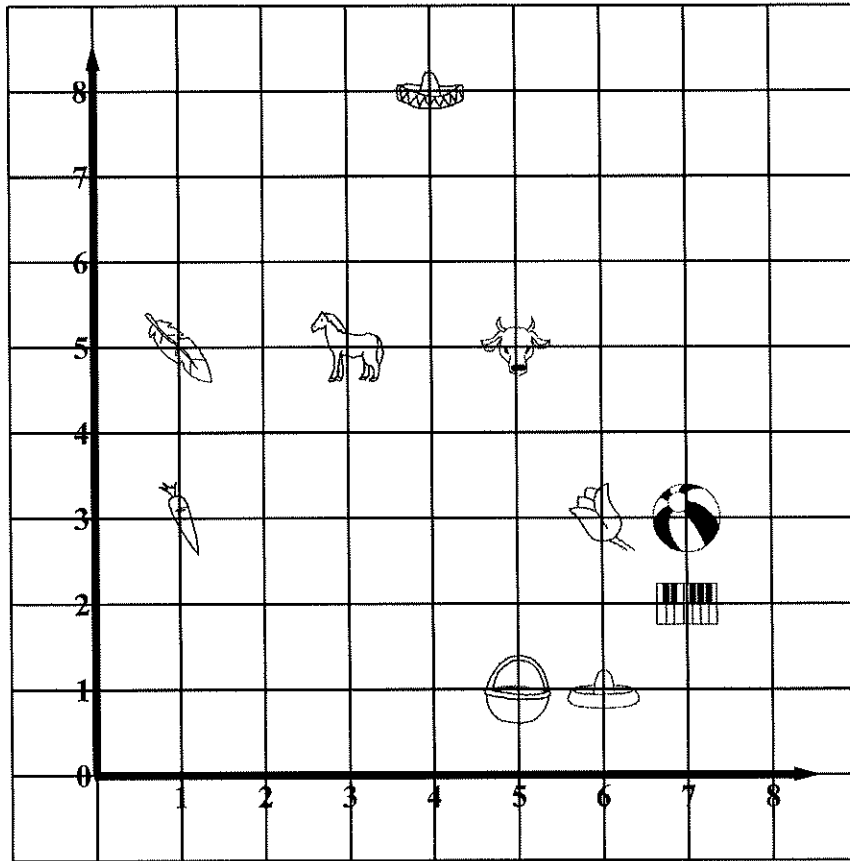
$$\begin{array}{r} 97 \\ - 16 \\ \hline \end{array}$$

$$\begin{array}{r} 39 \\ + 66 \\ \hline \end{array}$$

$$\begin{array}{r} 84 \\ + 12 \\ \hline \end{array}$$












Name: _____



Draw the picture that is at the ordered pair.

1. (1, 3)  _____
2. (4, 8) _____
3. (1, 5) _____
4. (7, 2) _____
5. (6, 3) _____
6. (5, 1) _____

Write the ordered pair for the given point.

7.  (7, 3) _____
8.  _____
9.  _____
10.  _____
11.  _____
12.  _____
13.  _____
14.  _____
15.  _____

Name: _____

Complete the pattern.

14	21	28	35	42	49	<u> </u>	<u> </u>
----	----	----	----	----	----	-------------	-------------

9	18	27	36	45	54	<u> </u>	<u> </u>
---	----	----	----	----	----	-------------	-------------

50	60	70	80	90	100	<u> </u>	<u> </u>
----	----	----	----	----	-----	-------------	-------------

18	24	30	36	42	48	<u> </u>	<u> </u>
----	----	----	----	----	----	-------------	-------------

Complete the pattern.

8	10	12	14	16	<u> </u>	<u> </u>	<u> </u>
---	----	----	----	----	-------------	-------------	-------------

25	30	35	40	45	<u> </u>	<u> </u>	<u> </u>
----	----	----	----	----	-------------	-------------	-------------

4	8	12	16	20	<u> </u>	<u> </u>	<u> </u>
---	---	----	----	----	-------------	-------------	-------------

Name: _____

Complete the pattern.

3 4 5 6 7 _____

32 40 48 56 64 _____

6 9 12 15 18 _____

16 24 32 40 48 _____

Complete the pattern.

3 6 9 12 15 _____

16 20 24 28 32 _____

36 45 54 63 72 _____

Name: _____

Week of March 30
Second Grade

and m i g l e z w u n d n a d n f a n d v c

shoulders a d o h e r s h o u l d e r s d y s h u

mothers m o t h e r s m h g j r m u t h u r z h

doll p l v d o z q l l d o l l t d a o l l g

add w l e d d u d a d d k d m d z a d d q y

brick r b r i k c m b t x k k u b r i c k w k

doctor o o a b d o c t o r d o c t o o r j o o

out w v r k z e f o t u t u p t o u t i g h

go c b g i h f m e s l o o u a d g k g o y

leader r e l e a d e r a a c l a e d i r e g j

river a e v j e r i v e r p r e e r r i b e r

pepper k p a p p r r b p l r p e p p e r v q p

can a c a a n n a y c a t w c a n c e n c o

curve p d f c u r v e v u u u h e c r u v e r

writer m j r c w i r t e r r o e t w r i t e r

sir t s r r a f g u i d h i s i r s u r r j

award w r w b a a w a r d a a w a r e d i r r

support s u p o r t o s u p p o r t s i v p t f

grandparent g r a n d p a r e n t h d a n i n r e q

caterpillar a g c a t e r p i l l a r s r r p c t a

pentagon p p e n t a g o n n p e n t a g o n e g

direction i t y n d i r e c t i o n q g e n u d p

nature g x t u o y n a t u r e n a c h u r e a

fish h i f i s h a t k s i s q c z f i s h o

Name: _____

Use each word ONCE. Cross off each word after it is used.

doll • leader • add • pepper • mothers • award • river • and
pentagon • writer • caterpillar • answered • grandparent • can
shoulders • brick

These words have "er" in them.

_____ e r _____

_____ e r _____

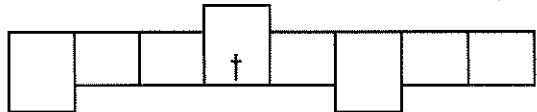
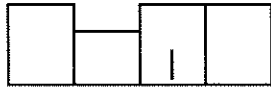
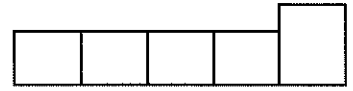
These words have the short a
sound like in ant.

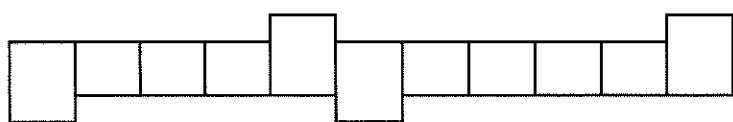
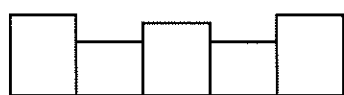
_____ d _____

These words have "ers" in them.

_____ e r s _____

Fit the rest of the words into these shapes.

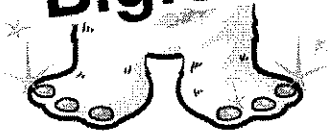
 

Name: _____

Bella Bigfoot

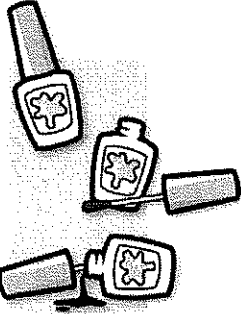


Bella Bigfoot needs things for school. Circle the nouns in the list on the left. Then draw a line from each noun to what part of Bella uses it:



Pretty toenail polish

Bella's tummy



Cute crimson cap

Bella's tootsies
(That is another name for toes!)

Big brass belt

Bella's big feet

Size 20 snazzy sneakers

Bella's legs

Lemon yellow leggings

Bella's head

Mint green mittens

Bella's hands



Bella's family broke their cell phone by dropping it. (They have fat fingers!) They need a picture of her! Draw a picture of Bella Bigfoot on the first day of school.

Name: _____

Try to spell some words.

ent • sh • tor • ~~up~~ • ~~po~~ • ~~it~~ • and • gr • mot • doc
par • rs • ers • ou • ve • he • cur • ld

support _____

Write the words into the boxes.

fish • grandparent • add • doll • award • out • direction • nature
pepper • shoulders • brick • sir • and • leader • writer • river
answered

Name: _____

Circle the words.

pepperleadergodollbrickansweredriver sir and can
leadergoandsircanriverbrickpepperadddollgoandsir
peppercanpeppercurveandsirsirgoandbrickpepper

Write the words into the boxes.

leader • curve • doll • pepper • go • answered • award • brick
fish • direction • add • sir

Try to spell some words.

ers • ~~re~~ • an • re • uld • nt • pe • ~~ti~~ • ~~ion~~ • dpa
ure • pp • gr • nat • and • ~~st~~ • er • sho

direction _____

Name: _____

Which way does each word go? Write the word.

<p>1. → STREET ← SEE ↓ SAILBOAT</p>	<p>1. → TRIP ↓ TWENTIES ← THEN</p> <p>2. ↓ WENT WHALE WING</p>																																																																																																																																																
<table border="1" style="margin: auto; border-collapse: collapse;"> <tr><td style="width: 20px; height: 20px;"></td><td style="width: 20px; height: 20px;"></td><td style="width: 20px; height: 20px; text-align: center;">1</td><td style="width: 20px; height: 20px; text-align: center;">S</td><td style="width: 20px; height: 20px; text-align: center;">T</td><td style="width: 20px; height: 20px; text-align: center;">R</td><td style="width: 20px; height: 20px; text-align: center;">E</td><td style="width: 20px; height: 20px; text-align: center;">E</td><td style="width: 20px; height: 20px; text-align: center;">T</td></tr> <tr><td style="background: repeating-linear-gradient(45deg, transparent, transparent 2px, black 2px, black 4px);"></td><td style="background: repeating-linear-gradient(45deg, transparent, transparent 2px, black 2px, black 4px);"></td><td style="background: repeating-linear-gradient(45deg, transparent, transparent 2px, black 2px, black 4px);"></td><td style="background: repeating-linear-gradient(45deg, transparent, transparent 2px, black 2px, black 4px);"></td><td style="background: repeating-linear-gradient(45deg, transparent, transparent 2px, black 2px, black 4px);"></td><td style="background: repeating-linear-gradient(45deg, transparent, transparent 2px, black 2px, black 4px);"></td><td style="background: repeating-linear-gradient(45deg, transparent, transparent 2px, black 2px, black 4px);"></td><td style="background: repeating-linear-gradient(45deg, transparent, transparent 2px, black 2px, black 4px);"></td><td style="background: repeating-linear-gradient(45deg, transparent, transparent 2px, black 2px, black 4px);"></td></tr> <tr><td style="background: repeating-linear-gradient(45deg, transparent, transparent 2px, black 2px, black 4px);"></td><td style="background: repeating-linear-gradient(45deg, transparent, transparent 2px, black 2px, black 4px);"></td><td style="background: repeating-linear-gradient(45deg, transparent, transparent 2px, black 2px, black 4px);"></td><td style="background: repeating-linear-gradient(45deg, transparent, transparent 2px, black 2px, black 4px);"></td><td style="background: repeating-linear-gradient(45deg, transparent, transparent 2px, black 2px, black 4px);"></td><td style="background: repeating-linear-gradient(45deg, transparent, transparent 2px, black 2px, black 4px);"></td><td style="background: repeating-linear-gradient(45deg, transparent, transparent 2px, black 2px, black 4px);"></td><td style="background: repeating-linear-gradient(45deg, transparent, transparent 2px, black 2px, black 4px);"></td><td style="background: repeating-linear-gradient(45deg, transparent, transparent 2px, black 2px, black 4px);"></td></tr> <tr><td style="background: repeating-linear-gradient(45deg, transparent, transparent 2px, black 2px, black 4px);"></td><td style="background: repeating-linear-gradient(45deg, transparent, transparent 2px, black 2px, black 4px);"></td><td style="background: repeating-linear-gradient(45deg, transparent, transparent 2px, black 2px, black 4px);"></td><td style="background: repeating-linear-gradient(45deg, transparent, transparent 2px, black 2px, black 4px);"></td><td style="background: repeating-linear-gradient(45deg, transparent, transparent 2px, black 2px, black 4px);"></td><td style="background: repeating-linear-gradient(45deg, transparent, transparent 2px, black 2px, black 4px);"></td><td style="background: repeating-linear-gradient(45deg, transparent, transparent 2px, black 2px, black 4px);"></td><td style="background: repeating-linear-gradient(45deg, transparent, transparent 2px, black 2px, black 4px);"></td><td style="background: repeating-linear-gradient(45deg, transparent, transparent 2px, black 2px, black 4px);"></td></tr> <tr><td style="background: repeating-linear-gradient(45deg, transparent, transparent 2px, black 2px, black 4px);"></td><td style="background: repeating-linear-gradient(45deg, transparent, transparent 2px, black 2px, black 4px);"></td><td style="background: repeating-linear-gradient(45deg, transparent, transparent 2px, black 2px, black 4px);"></td><td style="background: repeating-linear-gradient(45deg, transparent, transparent 2px, black 2px, black 4px);"></td><td style="background: repeating-linear-gradient(45deg, transparent, transparent 2px, black 2px, black 4px);"></td><td style="background: repeating-linear-gradient(45deg, transparent, transparent 2px, black 2px, black 4px);"></td><td style="background: repeating-linear-gradient(45deg, transparent, transparent 2px, black 2px, black 4px);"></td><td style="background: repeating-linear-gradient(45deg, transparent, transparent 2px, black 2px, black 4px);"></td><td style="background: repeating-linear-gradient(45deg, transparent, transparent 2px, black 2px, black 4px);"></td></tr> <tr><td style="background: repeating-linear-gradient(45deg, transparent, transparent 2px, black 2px, black 4px);"></td><td style="background: repeating-linear-gradient(45deg, transparent, transparent 2px, black 2px, black 4px);"></td><td style="background: repeating-linear-gradient(45deg, transparent, transparent 2px, black 2px, black 4px);"></td><td style="background: repeating-linear-gradient(45deg, transparent, transparent 2px, black 2px, black 4px);"></td><td style="background: repeating-linear-gradient(45deg, transparent, transparent 2px, black 2px, black 4px);"></td><td style="background: repeating-linear-gradient(45deg, transparent, transparent 2px, black 2px, black 4px);"></td><td style="background: repeating-linear-gradient(45deg, transparent, transparent 2px, black 2px, black 4px);"></td><td style="background: repeating-linear-gradient(45deg, transparent, transparent 2px, black 2px, black 4px);"></td><td style="background: repeating-linear-gradient(45deg, transparent, transparent 2px, black 2px, black 4px);"></td></tr> <tr><td style="background: repeating-linear-gradient(45deg, transparent, transparent 2px, black 2px, black 4px);"></td><td style="background: repeating-linear-gradient(45deg, transparent, transparent 2px, black 2px, black 4px);"></td><td style="background: repeating-linear-gradient(45deg, transparent, transparent 2px, black 2px, black 4px);"></td><td style="background: repeating-linear-gradient(45deg, transparent, transparent 2px, black 2px, black 4px);"></td><td style="background: repeating-linear-gradient(45deg, transparent, transparent 2px, black 2px, black 4px);"></td><td style="background: repeating-linear-gradient(45deg, transparent, transparent 2px, black 2px, black 4px);"></td><td style="background: repeating-linear-gradient(45deg, transparent, transparent 2px, black 2px, black 4px);"></td><td style="background: repeating-linear-gradient(45deg, transparent, transparent 2px, black 2px, black 4px);"></td><td style="background: repeating-linear-gradient(45deg, transparent, transparent 2px, black 2px, black 4px);"></td></tr> <tr><td style="background: repeating-linear-gradient(45deg, transparent, transparent 2px, black 2px, black 4px);"></td><td style="background: repeating-linear-gradient(45deg, transparent, transparent 2px, black 2px, black 4px);"></td><td style="background: repeating-linear-gradient(45deg, transparent, transparent 2px, black 2px, black 4px);"></td><td style="background: repeating-linear-gradient(45deg, transparent, transparent 2px, black 2px, black 4px);"></td><td style="background: repeating-linear-gradient(45deg, transparent, transparent 2px, black 2px, black 4px);"></td><td style="background: repeating-linear-gradient(45deg, transparent, transparent 2px, black 2px, black 4px);"></td><td style="background: repeating-linear-gradient(45deg, transparent, transparent 2px, black 2px, black 4px);"></td><td style="background: repeating-linear-gradient(45deg, transparent, transparent 2px, black 2px, black 4px);"></td><td style="background: repeating-linear-gradient(45deg, transparent, transparent 2px, black 2px, black 4px);"></td></tr> </table>			1	S	T	R	E	E	T																																																																<table border="1" style="margin: auto; border-collapse: collapse;"> <tr><td style="width: 20px; height: 20px; background: repeating-linear-gradient(45deg, transparent, transparent 2px, black 2px, black 4px);"></td><td style="width: 20px; height: 20px;"></td><td style="width: 20px; height: 20px;"></td><td style="width: 20px; height: 20px;"></td><td style="width: 20px; height: 20px; text-align: center;">1</td><td style="width: 20px; height: 20px;"></td><td style="width: 20px; height: 20px;"></td><td style="width: 20px; height: 20px;"></td></tr> <tr><td style="background: repeating-linear-gradient(45deg, transparent, transparent 2px, black 2px, black 4px);"></td><td style="background: repeating-linear-gradient(45deg, transparent, transparent 2px, black 2px, black 4px);"></td><td style="background: repeating-linear-gradient(45deg, transparent, transparent 2px, black 2px, black 4px);"></td><td style="background: repeating-linear-gradient(45deg, transparent, transparent 2px, black 2px, black 4px);"></td><td style="background: repeating-linear-gradient(45deg, transparent, transparent 2px, black 2px, black 4px);"></td><td style="background: repeating-linear-gradient(45deg, transparent, transparent 2px, black 2px, black 4px);"></td><td style="background: repeating-linear-gradient(45deg, transparent, transparent 2px, black 2px, black 4px);"></td><td style="background: repeating-linear-gradient(45deg, transparent, transparent 2px, black 2px, black 4px);"></td></tr> <tr><td style="background: repeating-linear-gradient(45deg, transparent, transparent 2px, black 2px, black 4px);"></td><td style="background: repeating-linear-gradient(45deg, transparent, transparent 2px, black 2px, black 4px);"></td><td style="background: repeating-linear-gradient(45deg, transparent, transparent 2px, black 2px, black 4px);"></td><td style="background: repeating-linear-gradient(45deg, transparent, transparent 2px, black 2px, black 4px);"></td><td style="background: repeating-linear-gradient(45deg, transparent, transparent 2px, black 2px, black 4px);"></td><td style="background: repeating-linear-gradient(45deg, transparent, transparent 2px, black 2px, black 4px);"></td><td style="background: repeating-linear-gradient(45deg, transparent, transparent 2px, black 2px, black 4px);"></td><td style="background: repeating-linear-gradient(45deg, transparent, transparent 2px, black 2px, black 4px);"></td></tr> <tr><td style="background: repeating-linear-gradient(45deg, transparent, transparent 2px, black 2px, black 4px);"></td><td style="background: repeating-linear-gradient(45deg, transparent, transparent 2px, black 2px, black 4px);"></td><td style="background: repeating-linear-gradient(45deg, transparent, transparent 2px, black 2px, black 4px);"></td><td style="background: repeating-linear-gradient(45deg, transparent, transparent 2px, black 2px, black 4px);"></td><td style="background: repeating-linear-gradient(45deg, transparent, transparent 2px, black 2px, black 4px);"></td><td style="background: repeating-linear-gradient(45deg, transparent, transparent 2px, black 2px, black 4px);"></td><td style="background: repeating-linear-gradient(45deg, transparent, transparent 2px, black 2px, black 4px);"></td><td style="background: repeating-linear-gradient(45deg, transparent, transparent 2px, black 2px, black 4px);"></td></tr> <tr><td style="background: repeating-linear-gradient(45deg, transparent, transparent 2px, black 2px, black 4px);"></td><td style="background: repeating-linear-gradient(45deg, transparent, transparent 2px, black 2px, black 4px);"></td><td style="background: repeating-linear-gradient(45deg, transparent, transparent 2px, black 2px, black 4px);"></td><td style="background: repeating-linear-gradient(45deg, transparent, transparent 2px, black 2px, black 4px);"></td><td style="background: repeating-linear-gradient(45deg, transparent, transparent 2px, black 2px, black 4px);"></td><td style="background: repeating-linear-gradient(45deg, transparent, transparent 2px, black 2px, black 4px);"></td><td style="background: repeating-linear-gradient(45deg, transparent, transparent 2px, black 2px, black 4px);"></td><td style="background: repeating-linear-gradient(45deg, transparent, transparent 2px, black 2px, black 4px);"></td></tr> <tr><td style="background: repeating-linear-gradient(45deg, transparent, transparent 2px, black 2px, black 4px);"></td><td style="background: repeating-linear-gradient(45deg, transparent, transparent 2px, black 2px, black 4px);"></td><td style="background: repeating-linear-gradient(45deg, transparent, transparent 2px, black 2px, black 4px);"></td><td style="background: repeating-linear-gradient(45deg, transparent, transparent 2px, black 2px, black 4px);"></td><td style="background: repeating-linear-gradient(45deg, transparent, transparent 2px, black 2px, black 4px);"></td><td style="background: repeating-linear-gradient(45deg, transparent, transparent 2px, black 2px, black 4px);"></td><td style="background: repeating-linear-gradient(45deg, transparent, transparent 2px, black 2px, black 4px);"></td><td style="background: repeating-linear-gradient(45deg, transparent, transparent 2px, black 2px, black 4px);"></td></tr> <tr><td style="background: repeating-linear-gradient(45deg, transparent, transparent 2px, black 2px, black 4px);"></td><td style="background: repeating-linear-gradient(45deg, transparent, transparent 2px, black 2px, black 4px);"></td><td style="background: repeating-linear-gradient(45deg, transparent, transparent 2px, black 2px, black 4px);"></td><td style="background: repeating-linear-gradient(45deg, transparent, transparent 2px, black 2px, black 4px);"></td><td style="background: repeating-linear-gradient(45deg, transparent, transparent 2px, black 2px, black 4px);"></td><td style="background: repeating-linear-gradient(45deg, transparent, transparent 2px, black 2px, black 4px);"></td><td style="background: repeating-linear-gradient(45deg, transparent, transparent 2px, black 2px, black 4px);"></td><td style="background: repeating-linear-gradient(45deg, transparent, transparent 2px, black 2px, black 4px);"></td></tr> <tr><td style="background: repeating-linear-gradient(45deg, transparent, transparent 2px, black 2px, black 4px);"></td><td style="background: repeating-linear-gradient(45deg, transparent, transparent 2px, black 2px, black 4px);"></td><td style="background: repeating-linear-gradient(45deg, transparent, transparent 2px, black 2px, black 4px);"></td><td style="background: repeating-linear-gradient(45deg, transparent, transparent 2px, black 2px, black 4px);"></td><td style="background: repeating-linear-gradient(45deg, transparent, transparent 2px, black 2px, black 4px);"></td><td style="background: repeating-linear-gradient(45deg, transparent, transparent 2px, black 2px, black 4px);"></td><td style="background: repeating-linear-gradient(45deg, transparent, transparent 2px, black 2px, black 4px);"></td><td style="background: repeating-linear-gradient(45deg, transparent, transparent 2px, black 2px, black 4px);"></td></tr> <tr><td style="background: repeating-linear-gradient(45deg, transparent, transparent 2px, black 2px, black 4px);"></td><td style="background: repeating-linear-gradient(45deg, transparent, transparent 2px, black 2px, black 4px);"></td><td style="background: repeating-linear-gradient(45deg, transparent, transparent 2px, black 2px, black 4px);"></td><td style="background: repeating-linear-gradient(45deg, transparent, transparent 2px, black 2px, black 4px);"></td><td style="background: repeating-linear-gradient(45deg, transparent, transparent 2px, black 2px, black 4px);"></td><td style="background: repeating-linear-gradient(45deg, transparent, transparent 2px, black 2px, black 4px);"></td><td style="background: repeating-linear-gradient(45deg, transparent, transparent 2px, black 2px, black 4px);"></td><td style="background: repeating-linear-gradient(45deg, transparent, transparent 2px, black 2px, black 4px);"></td></tr> </table>					1																																																																			
		1	S	T	R	E	E	T																																																																																																																																									
				1																																																																																																																																													


	7	4
-	6	1

19, ____, 21, ____, ____
____, 25

	9	4
-	7	1

A two-digit odd number has a 3 in the tens place. The sum of the ones and tens digits is 4. What is the number?

What time is it?



: _____

Amy has six tickets to the middle school play. She gave Amanda a ticket. She gave two tickets to April. How many tickets does Amy have left?

Name: _____

Week of March 30
Second Grade

Write these spelling words in ABC order:

nature • fish • leader • pentagon • and • brick

1. _____

4. _____

2. _____

5. _____

3. _____

6. _____

Unscramble the letters to spell a word.

elader _____

trelcpiarla _____

tou _____

nac _____

isr _____

ongpntea _____

dad _____

wesradne _____

adh _____

rtirew _____

eprpep _____

stomehr _____

eirvr _____

adwar _____

nciiedort _____

urvce _____

rrtnedapgna _____

urdeolssh _____

oldl _____

og _____

Name: _____

Today is _____

 March

 April

 May

Round each number to the nearest tens. Add or subtract to get an estimate of the answer.

$$\begin{array}{r} 91 \longrightarrow \boxed{30} \\ - 28 \longrightarrow \boxed{90} \\ \hline 120 \end{array}$$

$$\begin{array}{r} 73 \longrightarrow \boxed{} \\ - 37 \longrightarrow \boxed{} \\ \hline \end{array}$$

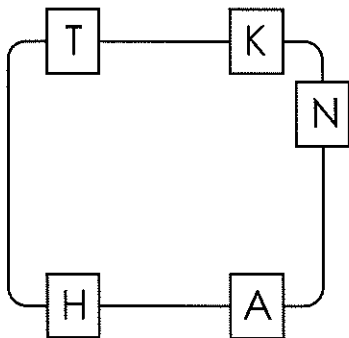
$$\begin{array}{r} 36 \longrightarrow \boxed{} \\ + 64 \longrightarrow \boxed{} \\ \hline \end{array}$$

$$\begin{array}{r} 51 \longrightarrow \boxed{} \\ + 15 \longrightarrow \boxed{} \\ \hline \end{array}$$

$$\begin{array}{r} 44 \longrightarrow \boxed{} \\ - 27 \longrightarrow \boxed{} \\ \hline \end{array}$$

$$\begin{array}{r} 89 \longrightarrow \boxed{} \\ + 91 \longrightarrow \boxed{} \\ \hline \end{array}$$

Write the hidden word. Start at one letter and then move either left or right.



Draw 30 tally marks.

$$5+30+200$$



$$\begin{array}{r} 7 \\ 7 \\ + 1 \\ \hline \end{array}$$

$$\begin{array}{r} 93 \\ + 73 \\ \hline \end{array}$$

Which number is even?

-
- 65
-
- 64

eighty-nine

-
- 86
-
- 83
-
- 89

3 quarters 5 nickels

-
- 101¢
-
- 140¢
-
-
- 100¢

Name: _____

Fix the sentence.

dont touch that?

Rewrite the sentence to include more details.
My dad took us.

$400+3+80$

Hours Spent Watching TV Each Week

Ellen	
Eli	
Justin	

Write the number that comes before.

_____ 479

_____ 856

_____ 81

_____ 347

_____ 580

_____ 42

Who watches the most TV each week?

$$\begin{array}{r} 32 \\ + 42 \\ \hline \end{array}$$

$6+50+500$

Who watches the least amount of TV each week?

Use these numbers to fill in the blanks.

54 49 41 44 57

The smallest number is _____.

The largest number is _____.

_____ is 2 more than 42.

_____ is less than 57 but more than 41.

Seventeen is an even number.

yes no


$69 - 28 = \underline{\hspace{2cm}}$

$$\begin{array}{r} 97 \\ + 82 \\ \hline \end{array}$$


$$\begin{array}{r} 55 \\ - 49 \\ \hline \end{array}$$

Name: _____


Circle the letters to the word. Write the word.




R
C
J
A




R F
I T
P C
U F



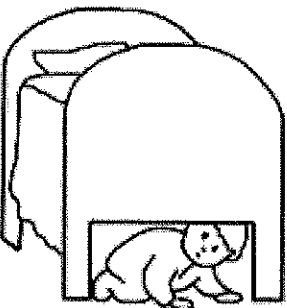
A T
K
K A H
E G



W
P I
G
A
T P M




K
V K Y A
A Y




U D
R
Y N E
D D

58, _____, _____, _____, 62, 63,



How much is this?



Name: _____

One letter is missing from each word.

S O G G Y

M V E

S P C E

F R E L Y

E A R L

B R U S

E L V E N

M A D

G R P E

Write your own words!

Name: _____

ER Words

ER makes /EHr/ sound

R V H S B V E R Y R E D I P C
 B W S T R A W B E R R I E S E
 T W T I E R M H B E A T E I R
 E E S C H E R R I E S R E E I
 R R H R E R M E R R Y Y R E T
 I R E Y T E R R I B L E R S M
 R R R E W E N T B E R R I E S
 T E T X R E V V U E R I R B I
 V T H E R E S R B T E R H T S
 K E E V H B E E E S F A H R R

ER makes /ihr/ sound

I R Z V I M B L G L O B S E S
 I A I R O M A T E R I A L O R
 Z H U O I O E O X R H U E N R
 L L S H B E E D E C I S E S M
 A C R I A K Z R R A U S S E H
 A U S I A A T S A S R S U R E
 M A A M O R S E R I E S N I R
 Z E R O E S I T M A E I H O O
 E R E S E R R F R V E T E U O
 B A C T E R I U M S R E A S O

VERY • STRAWBERRIES • THERE
 CHERRIES • MERRY • BERRIES
 TERRIBLE

HERO • MATERIAL • ZEROES
 BACTERIUM • SERIES • SERIOUS

$70 + 30 = \underline{\hspace{2cm}}$

$93 + 31 = \underline{\hspace{2cm}}$

Erin had 7 dimes. She used 2 dimes to buy an apple. She gave the apple to her horse. How many dimes did she have left?

$$\begin{array}{r} 59 \\ + 62 \\ \hline \end{array}$$

ten more than 153

$$\begin{array}{r} 26 \\ + 50 \\ \hline \end{array}$$

Make 39.

$\underline{16} + \underline{\hspace{1cm}}$

$\underline{34} + \underline{\hspace{1cm}}$

$\underline{28} + \underline{\hspace{1cm}}$

$\underline{\hspace{1cm}} + \underline{10}$

$\underline{\hspace{1cm}} + \underline{6}$

$\underline{\hspace{1cm}} + \underline{14}$

$\underline{\hspace{1cm}} + \underline{29}$

$\underline{\hspace{1cm}} + \underline{27}$

$\underline{22} + \underline{\hspace{1cm}}$

word root **cor** can mean **heart**

courageous, concord